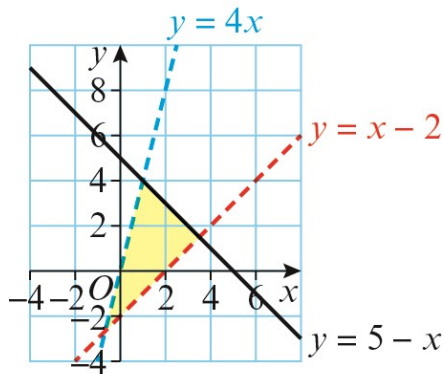
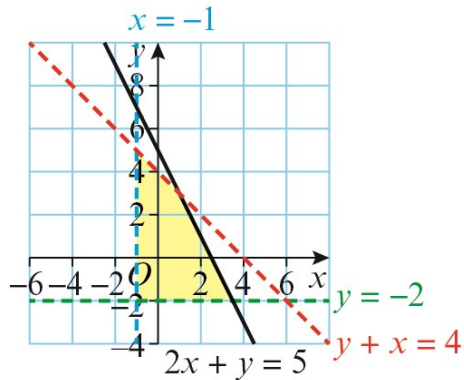


Exercise 3G

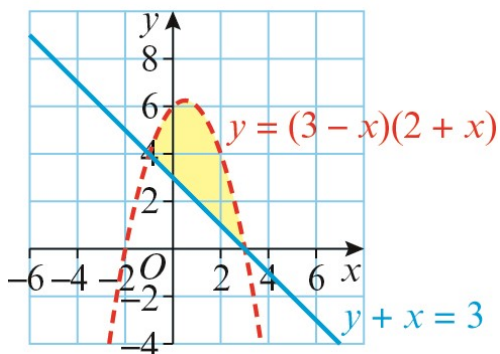
1



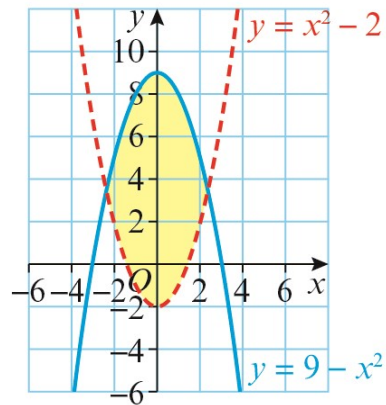
2



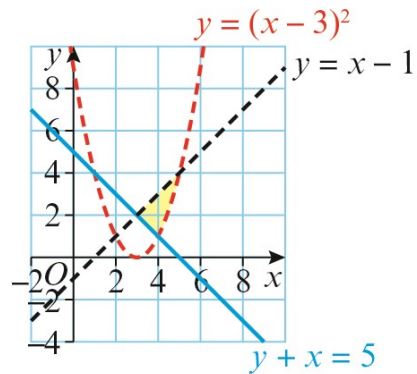
3



4



5



6 a For $y = x + 1$ and $y = 7 - x$:

$$\begin{aligned} x + 1 &= 7 - x \\ 2x &= 6 \\ x &= 3, y = 4 \end{aligned}$$

For $y = 7 - x$ and $x = 1$:

$$x = 1, y = 6$$

For $x = 1$ and $y = x + 1$

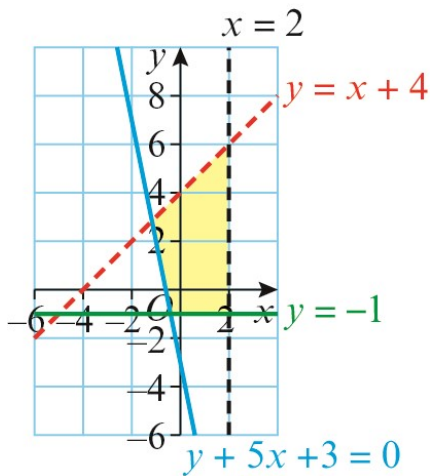
$$x = 1, y = 2$$

The points of intersection are $(3, 4)$, $(1, 6)$ and $(1, 2)$.

b $y \geq x + 1$, $y \leq 7 - x$ and $x \geq 1$

7 $y < 2 - 5x - x^2$, $2x + y \geq 0$ and $x + y \leq 4$

8 a



- b** For $y = x + 4$ and $y = -5x - 3$:
 $x + 4 = -5x - 3$
 $6x = -7$
 $x = -\frac{7}{6}$, $y = \frac{17}{6}$
 For $y = -5x - 3$ and $y = -1$:
 $y = -1$, $x = -\frac{2}{5}$
 For $y = -1$ and $x = 2$:
 $x = 2$, $y = -1$
 For $x = 2$ and $y = x + 4$:
 $x = 2$, $y = 6$
 The vertices are at the points
 $(-\frac{7}{6}, \frac{17}{6})$, $(-\frac{2}{5}, -1)$, $(2, -1)$ and $(2, 6)$.

- c** $(-\frac{2}{5}, -1)$ is the only vertex formed by two solid lines.

- d** Area of shaded region = area of right-angled triangle – area of unshaded triangle

Area of right-angled triangle

$$= \frac{1}{2} \times 7 \times 7$$

$$= \frac{49}{2}$$

Area of unshaded triangle

$$= \frac{1}{2} \times (-\frac{2}{5} - (-5)) \times (\frac{17}{6} - (-1))$$

$$= \frac{529}{60}$$

Area of shaded region

$$= \frac{49}{2} - \frac{529}{60}$$

$$= \frac{941}{60}$$